

POLI/INTL 361 Fall 2023

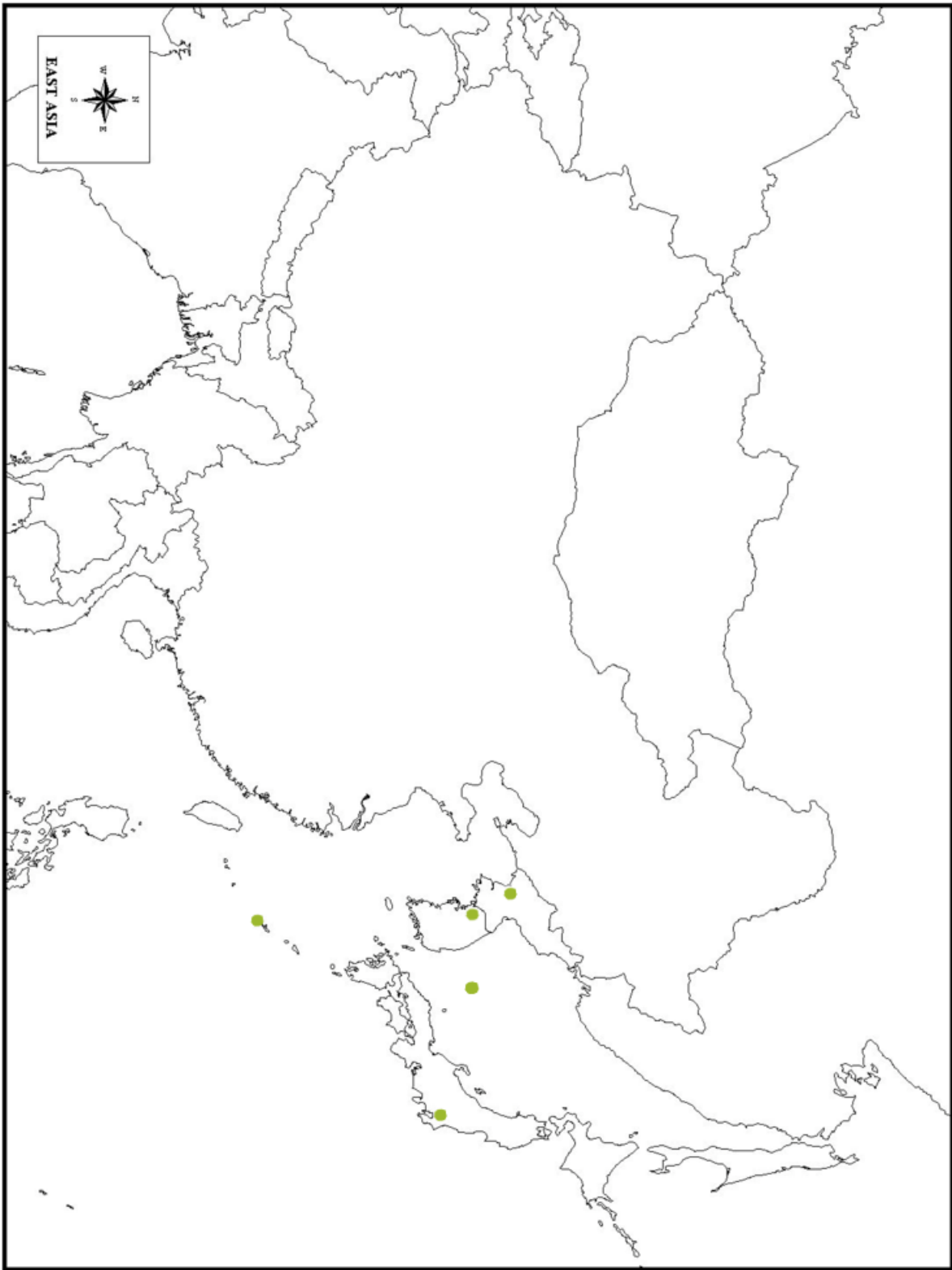
**Map Quiz: China-Taiwan Simulation
Burdett/Newmann**

Your mission (if you choose to accept it) is to identify the following 50 countries, cities, islands, or bodies of water. You will only need to identify something on the specific map as indicated below. Use any map on the internet to locate these. For the quiz, you will be given this list again along with the three maps we've included here. The questions will prompt you to click on the country, city, or other features detailed on these lists. (Hot tip: the dots on the maps are either cities or features like an island or island group.)

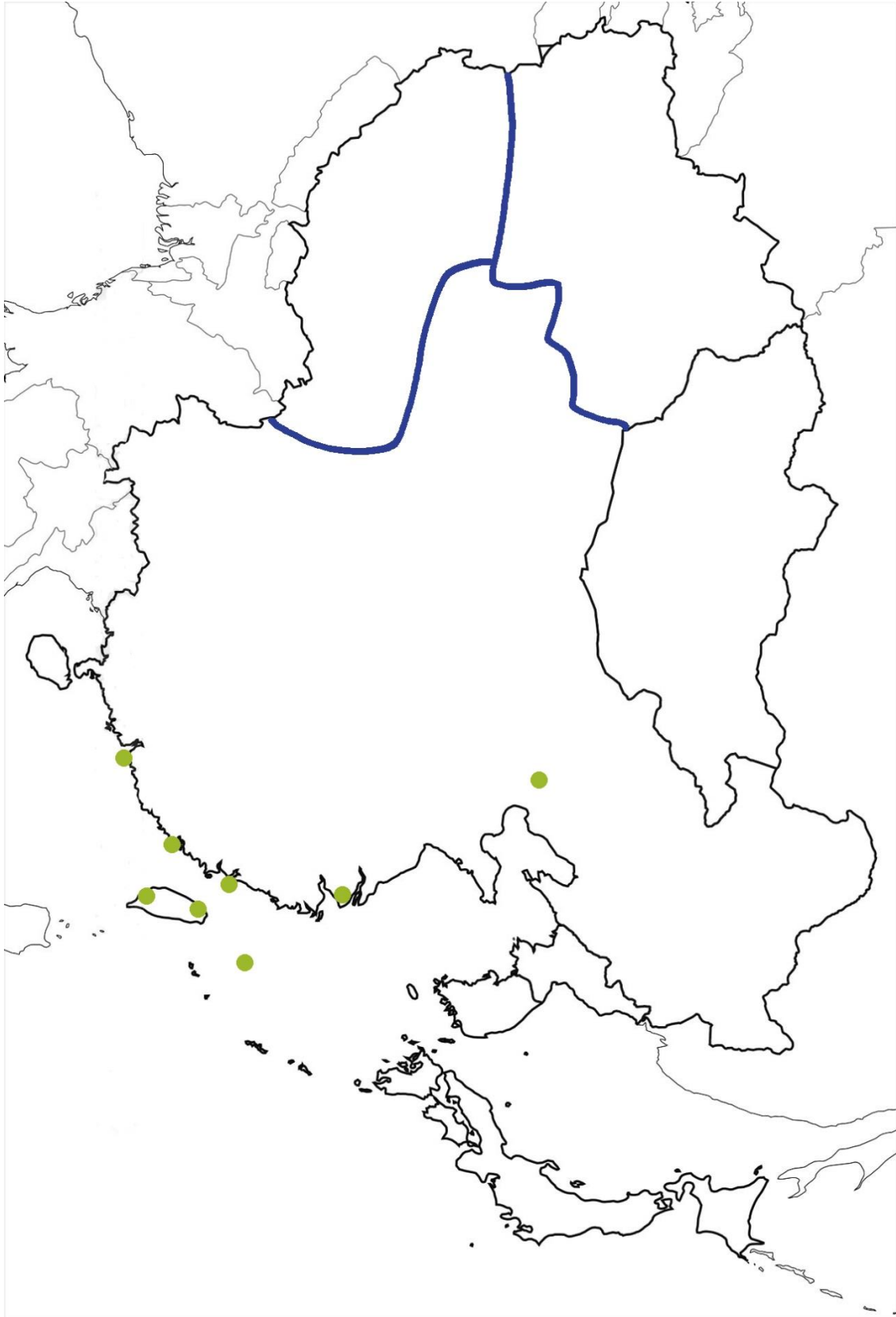
Map One: Northeast Asia (11)
China
Japan
<i>Tokyo (capital of Japan)</i>
<i>Okinawa (island belonging to Japan)</i>
Russia
South Korea
<i>Seoul (capital of South Korea)</i>
North Korea
<i>Pyongyang (Capital of North Korea)</i>
<i>East Sea or Sea of Japan (depending on who you're asking...)</i>
<i>Dokdo (South Korea) or Takeshima (Japan) Islands</i>

Map Two: China and Taiwan (and surrounding Islands) (16)
China
<i>Beijing (capital of China)</i>
<i>Shanghai (city in China)</i>
<i>Hong Kong (special administrative region of China)</i>
<i>Hainan Island (province of China)</i>
<i>Tibet (Xizang) (autonomous region of China)</i>
<i>Xinjiang (autonomous region of China)</i>
Taiwan
<i>Taipei (capital of Taiwan)</i>
<i>Kaohsiung (city in Taiwan)</i>
<i>Quemoy (Kinmen) (island belonging to Taiwan close to Chinese mainland)</i>
<i>Matsu Islands (sometimes called Nankan (islands belonging to Taiwan close to Chinese mainland))</i>
<i>Taiwan Straits</i>
<i>Ryukyu Islands (islands belonging to Japan)</i>
<i>Okinawa (island belonging to Japan; part of Ryukyus)</i>
<i>Senkaku (Japan) or Diaoyu (China) Islands</i>

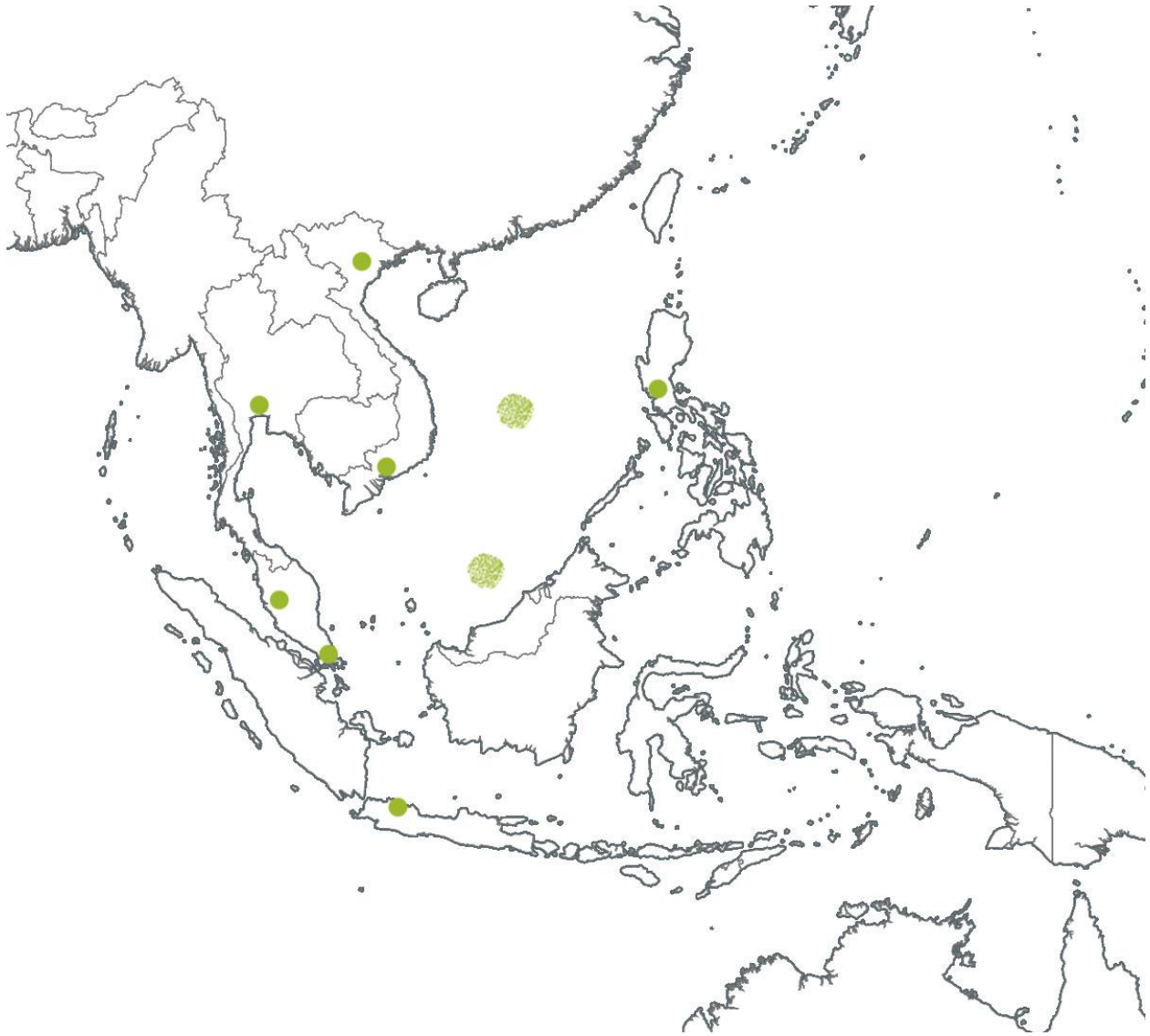
Map Three Southeast Asia (23)
Brunei Darussalam
Cambodia
China
Indonesia
<i>Jakarta (capital of Indonesia)</i>
Lao People's Democratic Republic (Laos)
Malaysia
<i>Kuala Lumpur (capital of Malaysia)</i>
Myanmar (Burma)
Philippines
<i>Manila (capital of Philippines)</i>
Singapore
Thailand
<i>Bangkok (capital of Thailand)</i>
Vietnam
<i>Hanoi (capital of Vietnam)</i>
<i>Ho Chi Minh City (city in Vietnam)</i>
<i>Indian Ocean</i>
<i>Palawan (island of Philippines)</i>
<i>Spratly Islands in the South China Sea</i>
<i>Paracel Islands in the South China Sea</i>
<i>Hainan Island (Province of China)</i>
<i>Strait of Malacca (narrow waterway between Singapore, Malaysia, and Indonesian Island of Sumatra; connects the South China sea to the Indian Ocean)</i>



Map 1: Northeast Asia



Map 2: China & Taiwan



Map 3: Southeast Asia