


MHIS 136

Chapter 11, #1 - Inversions of the V⁷

Name


Write the indicated chords and resolve to tonic triads.



A musical exercise on a grand staff (treble and bass clefs) with a key signature of one sharp (F#). The exercise consists of five measures, each containing a dominant seventh chord in a different inversion. The chords are: e: V⁴, Bb: V⁶, A: V⁴, f: V³, and b: V⁶. The notes for each chord are written in the bass clef, and the treble clef is left empty for the student to write the resolution to tonic triads.

e: V⁴ Bb: V⁶ A: V⁴ f: V³ b: V⁶


Realize the following figured bass. Analyze your work.



A musical exercise on a grand staff with a key signature of two flats (Bb, Eb). The exercise consists of four measures. The bass clef contains a sequence of notes with figured bass notation below them. The figures are: 6/5, #6/4/3, 6, #4/2, 6, #6/4/3, and #. The treble clef is left empty for the student to realize the harmony.

6/5 #6/4/3 6 #4/2 6 #6/4/3 #

Harmonize the following, employing inversions of the dominant seventh as indicated.



A musical exercise on a grand staff with a key signature of one sharp (F#). The exercise consists of three measures. The treble clef contains a sequence of notes: G4, A4, B4, C5, B4, A4, G4. The bass clef is left empty for the student to harmonize the melody with inversions of the dominant seventh chord as indicated by the figures below.

G: V² F: V⁶₅ Db: V⁴₃