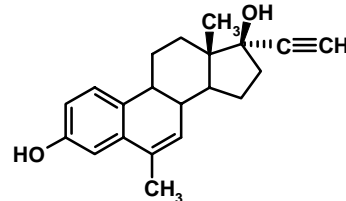
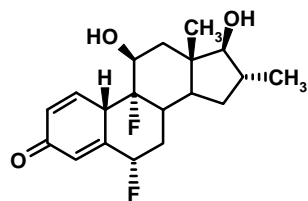
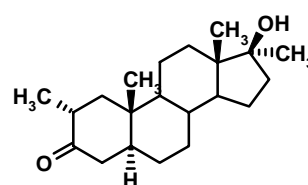
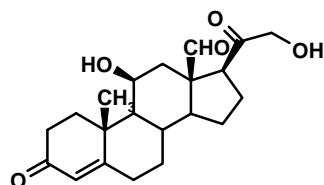
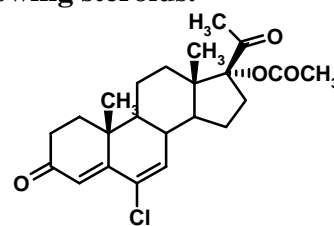
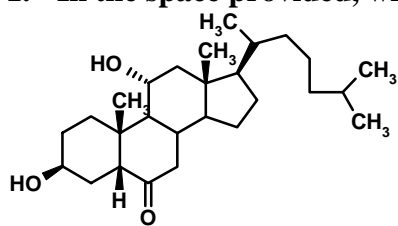


1. In the space provided, write the systematic name of the following steroids.



2. Draw the structures of the following steroids

- cholest-5-ene-3 β ,7 α -diol
- 9 α -fluoro-11 β ,17 α ,21-trihydroxy-16 β -methyl-pregn-1,4-diene-3,20-dione
- 17 α -methyl-17 β -hydroxy-18-nor-androst-4-en-3-one
- 3 α ,7 α -dihydroxy-5 β -cholan-24-oic acid