


MHIS 135

Name


Chapter 6 - Subdominant/dominant (1)

Harmonize the following using only subdominant and dominant triads:




A musical score in C major, 2/4 time, consisting of two staves. The melody is: A4, G4, F4, E4, D4, C4, B3, A3, G3, F3, E3, D3. The bass line is: C3, F2, C3, G2, C3, F2, C3, G2, C3, F2, C3, G2. The harmonic analysis below the bass line is: A: IV V f: iv V D: IV V g: iv V

Realize the following figured bass. Analyze your work!



A musical score in F major, 2/4 time, consisting of two staves. The melody is: F4, E4, D4, C4, B3, A3, G3, F3, E3, D3, C3, B2, A2, G2, F2. The bass line is: F2, C2, F2, C2, F2, C2, F2, C2, F2, C2, F2, C2, F2, C2, F2, C2. The figured bass below the bass line is: V i iv 7 V i i iv V V I. Annotations include: a dashed line labeled '8-7' connecting the 8th and 7th notes of the bass line; a label 'LT' pointing to the 14th note of the bass line; and a label 'free resolution' pointing to the 15th note of the bass line.

Analyze the following chorale. Circle and label the part-writing errors.



A musical score in G major, 6/8 time, consisting of two staves. The melody is: G4, A4, B4, C5, B4, A4, G4, F4, E4, D4, C4, B3, A3, G3, F3, E3, D3. The bass line is: G2, C2, G2, C2, G2, C2, G2, C2, G2, C2, G2, C2, G2, C2, G2, C2, G2, C2. The harmonic analysis below the bass line is: I IV I I IV V I. Annotations include: a label 'LT must resolve strictly when in outer voice.' pointing to the 14th note of the melody; a label 'Parallel 5ths' pointing to the 14th and 15th notes of the bass line; and a label 'Parallel octaves' pointing to the 14th and 15th notes of the bass line.