

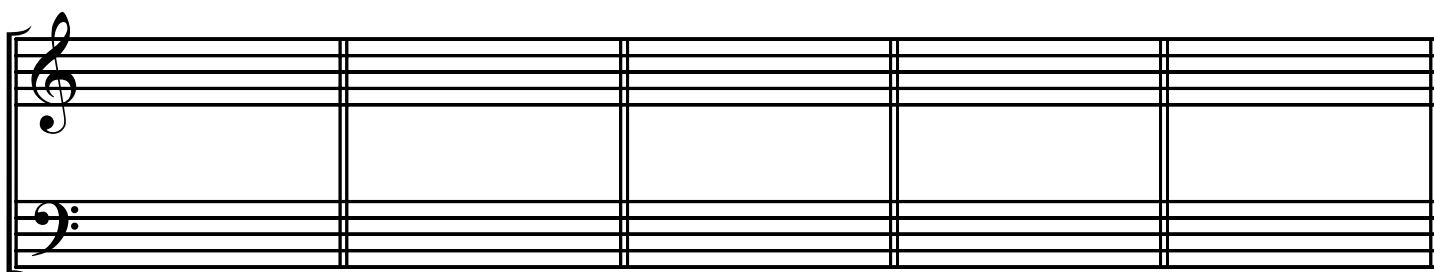
Key Signatures III

Name: _____

Write the key signatures for the indicated major keys:

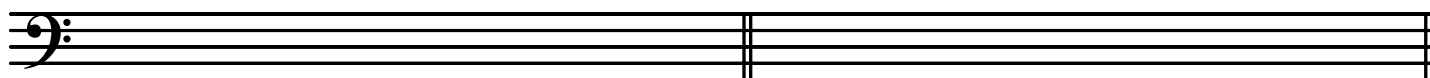


b c e d f#



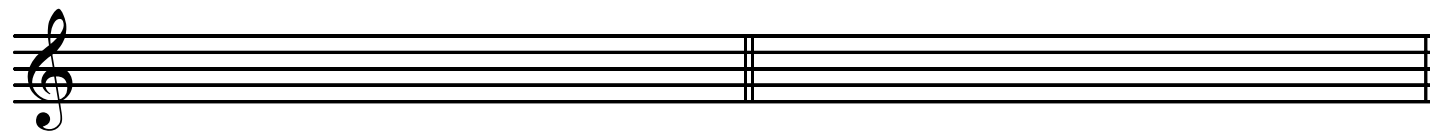
f g# g e b \flat

Construct the indicated minor scales using key signatures and accidentals only where necessary:



harmonic minor on d²

natural minor on f#²



ascending melodic minor on f⁴

harmonic minor e⁴



natural minor on c²

harmonic minor on b²